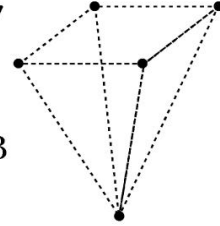
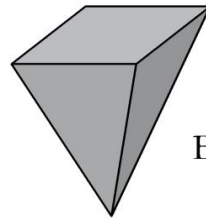
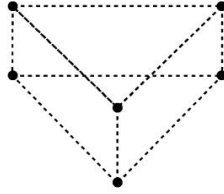
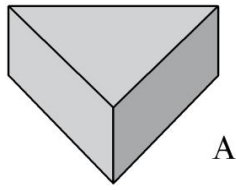
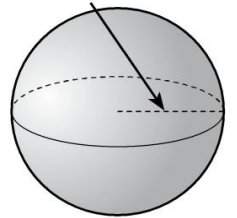
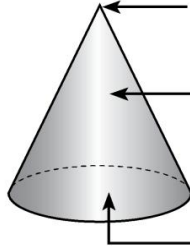
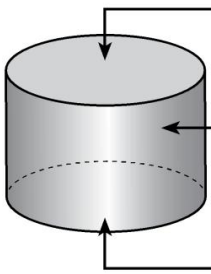


1 Observa y completa la tabla.



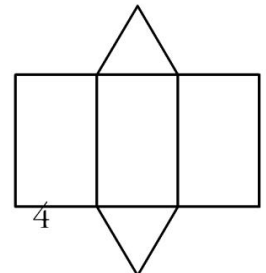
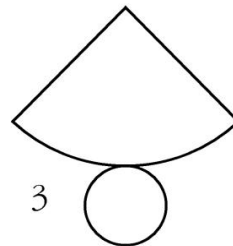
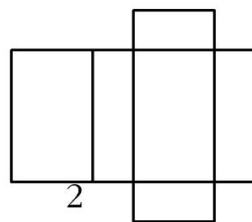
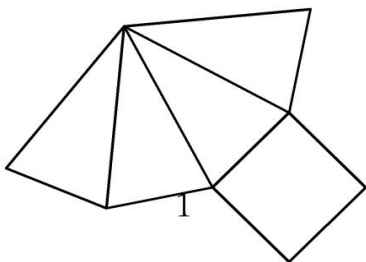
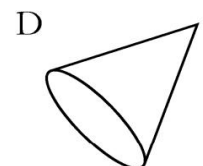
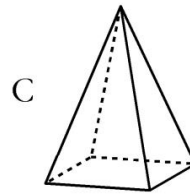
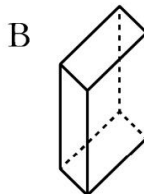
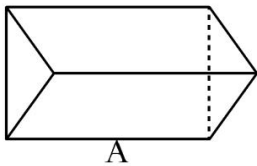
	N.º DE CARAS	N.º DE VÉRTICES	N.º DE ARISTAS
A			
B			

2 ¿Qué tienen en común estos cuerpos geométricos? Escribe el nombre de cada uno de ellos y nombra los elementos señalados:



.....

3 Asocia cada figura al desarrollo que corresponda y nombra los cuerpos geométricos.



.....

.....