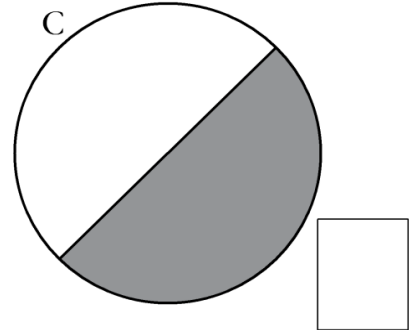
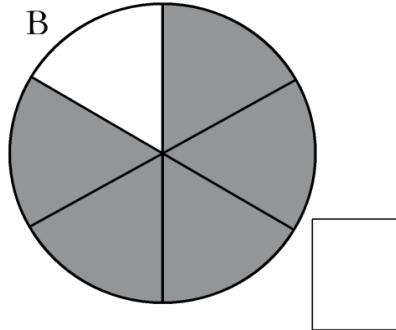
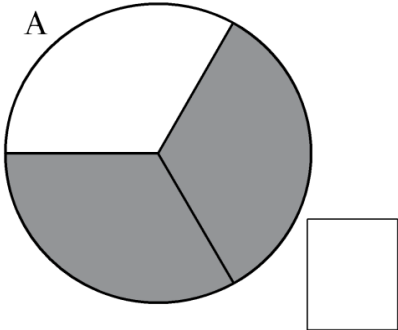
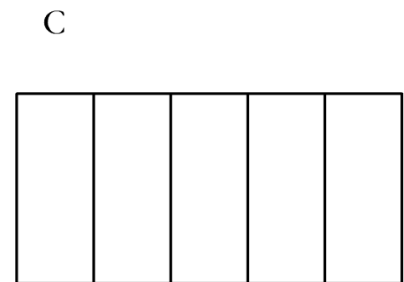




1 Indica qué fracción está representada en cada figura.



2 Colorea la fracción que se indica en cada caso.



$$\frac{3}{8}$$

$$\frac{1}{4}$$

$$\frac{1}{5}$$

3 Escribe el número decimal que corresponde a cada fracción.

a) $\frac{43}{10} = \dots\dots\dots$

d) $\frac{80}{10} = \dots\dots\dots$

b) $\frac{43}{100} = \dots\dots\dots$

e) $\frac{80}{100} = \dots\dots\dots$

c) $\frac{43}{1000} = \dots\dots\dots$

f) $\frac{800}{1000} = \dots\dots\dots$

4 Completa.

a) $0,3 = \frac{\square}{10}$

b) $0,12 = \frac{\square}{100}$

c) $0,008 = \frac{8}{\square}$