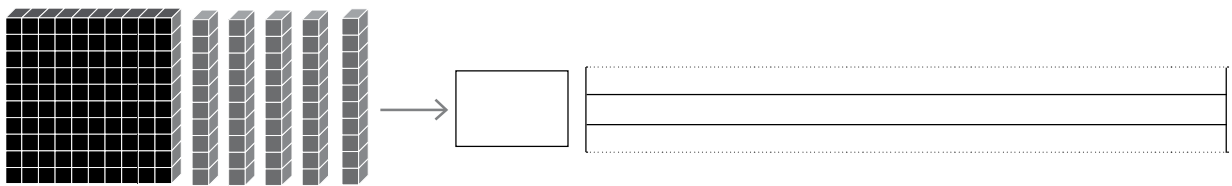
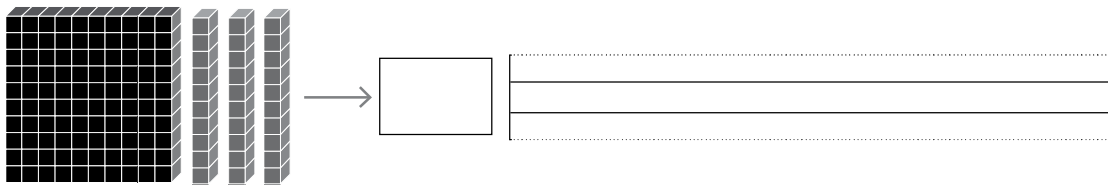
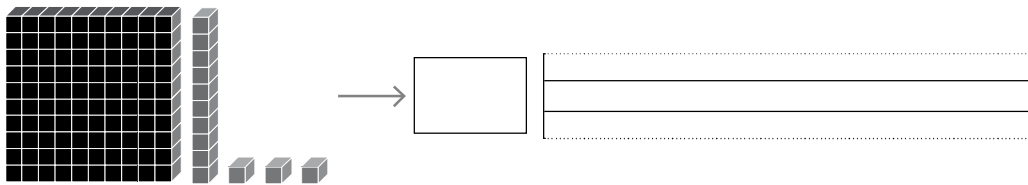
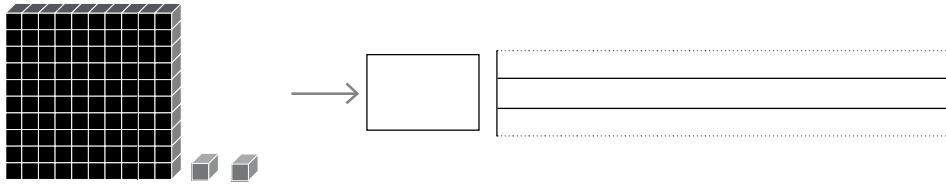


Nombre: _____ Fecha: _____

● Completa.



● Completa.

| | | | | |
|-------------------|-----------------|---|-----------------------------------|-----------------|
| $8 + 6 = \square$ | $+ 8 = \square$ | } | $6 + 10 = \square$ | $+ 6 = \square$ |
| $9 + 2 = \square$ | $+ 9 = \square$ | | $8 + 20 = 20 + \square = \square$ | |
| $7 + 3 = \square$ | $+ 7 = \square$ | | $5 + 30 = 30 + \square = \square$ | |