



Nombre: _____ Fecha: _____


● Escribe.



--	--



--	--



--	--

● Calcula.

$$\begin{array}{c}
 6 + 8 + 7 \\
 \swarrow \quad \searrow \\
 \square + \square = \square
 \end{array}$$

$$\begin{array}{c}
 6 + 8 + 7 \\
 \downarrow \quad \swarrow \quad \searrow \\
 \square + \square = \square
 \end{array}$$



$$\begin{array}{c}
 5 + 4 + 10 \\
 \downarrow \quad \swarrow \quad \searrow \\
 \square + \square = \square
 \end{array}$$

$$\begin{array}{c}
 5 + 4 + 10 \\
 \swarrow \quad \searrow \quad \downarrow \\
 \square + \square = \square
 \end{array}$$