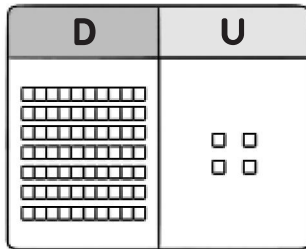
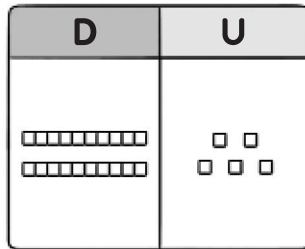


Nombre: \_\_\_\_\_ Fecha: \_\_\_\_\_

● **Observa los números representados y completa.**



74



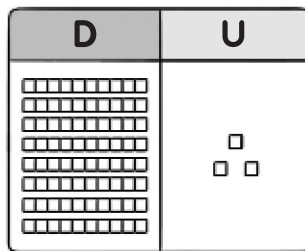
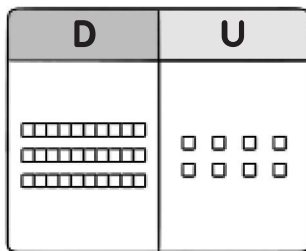
25

\_\_\_\_\_ es mayor que \_\_\_\_\_

>

\_\_\_\_\_ es menor que \_\_\_\_\_

<




\_\_\_\_\_ es mayor que \_\_\_\_\_

>

\_\_\_\_\_ es menor que \_\_\_\_\_

<

● **Compara y completa.**




\_\_\_\_\_

\_\_\_\_\_

>

<




\_\_\_\_\_

\_\_\_\_\_

>

<



\_\_\_\_\_

\_\_\_\_\_

>

<