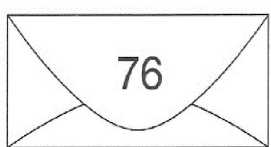
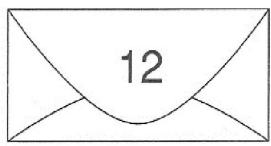
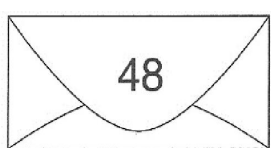
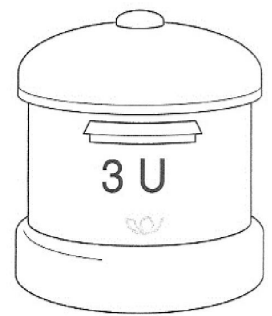
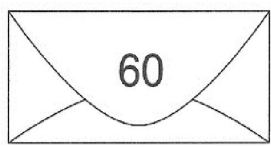
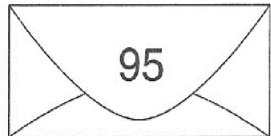
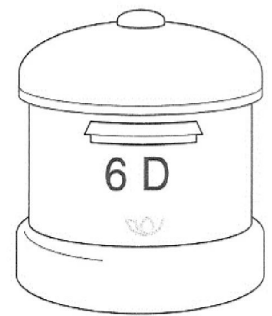
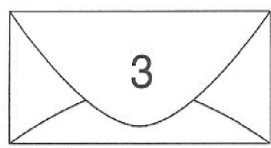


Nombre: _____ Fecha: _____

● Une según corresponda.



● Suma y resta.

$$\begin{array}{r} 57 \\ + 29 \\ \hline \square \end{array}$$

$$\begin{array}{r} 23 \\ + 11 \\ \hline \square \end{array}$$

$$\begin{array}{r} 35 \\ + 8 \\ \hline \square \end{array}$$

$$\begin{array}{r} 39 \\ + 46 \\ \hline \square \end{array}$$

$$\begin{array}{r} 69 \\ - 37 \\ \hline \square \end{array}$$

$$\begin{array}{r} 63 \\ - 21 \\ \hline \square \end{array}$$

$$\begin{array}{r} 45 \\ - 5 \\ \hline \square \end{array}$$

$$\begin{array}{r} 33 \\ - 11 \\ \hline \square \end{array}$$