
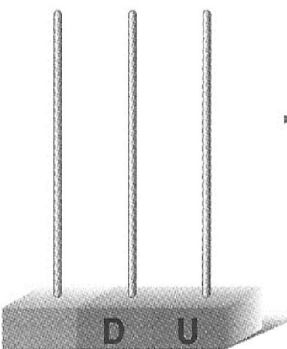


Nombre: _____ Fecha: _____

● **Dibuja y escribe.**



→ 95 → +




→ 97 → +


Calcula y completa.

- | | | | | | | | | |
|----|---|----|----|----|----|----|----|----|
| 48 | 3 | 12 | 76 | 52 | 93 | 29 | 80 | 91 |
|----|---|----|----|----|----|----|----|----|

Suma los tres números menores.



Resta al número mayor el que tiene 8 decenas.



Ordena de mayor a menor los números que no has utilizado.

<input type="text"/>	<input type="text"/>	<input type="text"/>	<input type="text"/>
----------------------	----------------------	----------------------	----------------------