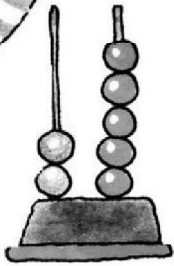
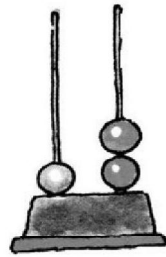


Nombre: _____ Fecha: _____




2 5



• Escribe los números.

1 decena y 2 unidades



decenas y unidades

• Suma.

$$\begin{array}{r} 11 \\ + 9 \\ \hline \end{array}$$

$$\begin{array}{r} 28 \\ + 36 \\ \hline \end{array}$$

$$\begin{array}{r} 2 \\ + 68 \\ \hline \end{array}$$

$$\begin{array}{r} 32 \\ + 40 \\ \hline \end{array}$$

$$\begin{array}{r} 9 \\ + 52 \\ \hline \end{array}$$

$$\begin{array}{r} 51 \\ + 3 \\ \hline \end{array}$$

$$\begin{array}{r} 33 \\ + 45 \\ \hline \end{array}$$

$$\begin{array}{r} 67 \\ + 2 \\ \hline \end{array}$$

$$\begin{array}{r} 38 \\ + 4 \\ \hline \end{array}$$

$$\begin{array}{r} 1 \\ + 39 \\ \hline \end{array}$$

$$\begin{array}{r} 14 \\ + 57 \\ \hline \end{array}$$

$$\begin{array}{r} 51 \\ + 9 \\ \hline \end{array}$$

$$\begin{array}{r} 2 \\ + 56 \\ \hline \end{array}$$

$$\begin{array}{r} 68 \\ + 11 \\ \hline \end{array}$$

$$\begin{array}{r} 28 \\ + 3 \\ \hline \end{array}$$

• Escribe de 3 en 3.

