


# Evaluación inicial

Nombre \_\_\_\_\_ Fecha \_\_\_\_\_

1 Completa la serie.



2 Cuenta y relaciona.



8

4

3

7

5


3 Dibuja.



dentros




fuera

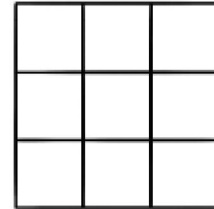


4 Colorea y completa las sumas.

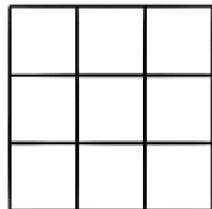
$$3 + 2 = \square$$



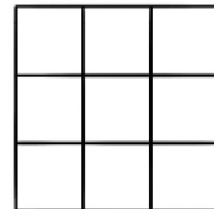
$$4 + 5 = \square$$



$$2 + 5 = \square$$



$$7 + 1 = \square$$



5 Tacha y completa las restas.

$$5 - 2 = \square$$



$$4 - 3 = \square$$




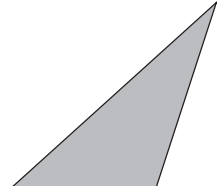


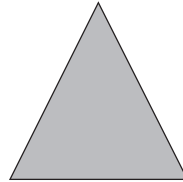


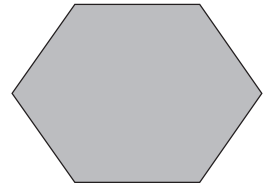
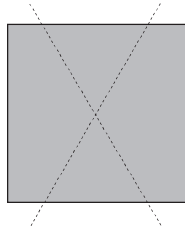
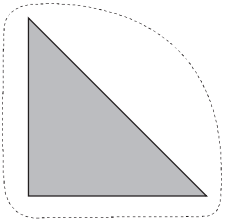
$$7 - 4 = \square$$




$$6 - 1 = \square$$




6 Rodea los triángulos y tacha los cuadrados.



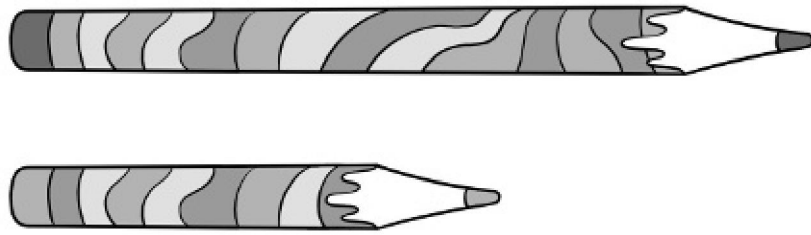
7 Dibuja.

5 

3 

6 


8 Rodea de rojo la pintura más larga.



9 Dibuja.

3  a la izquierda del gato.

2  a la derecha del gato.



10 ¿Cómo se ven desde arriba los objetos? Relaciona.

